









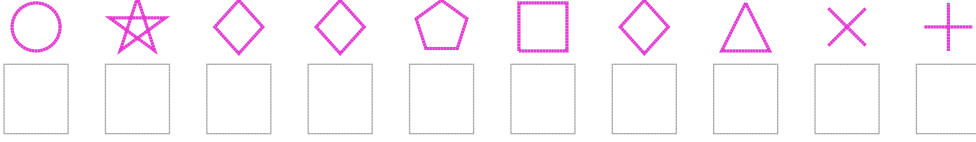


Şekil Sayı Eşleştirme

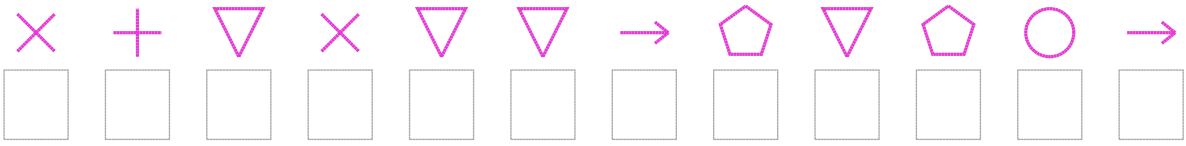
 = 3	 = 1	 = 4	 = 0	 = 5	 = 8	 = 2	 = 9	 = 6	 = 7
--	--	--	--	--	--	---	--	--	--

Aşağıdaki uzun şifreleri hatasız çözerek altlarına yazın:

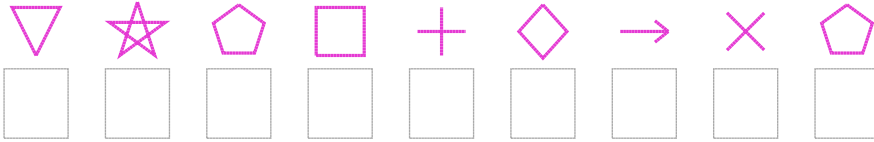
1. Şifre



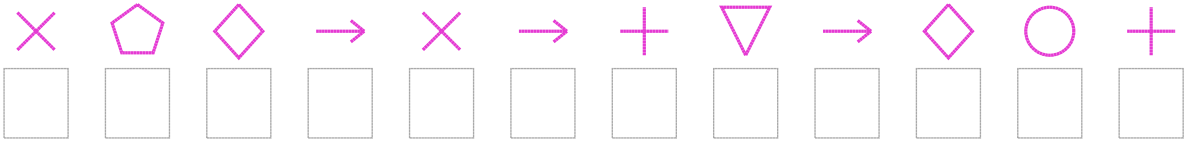
2. Şifre




3. Şifre



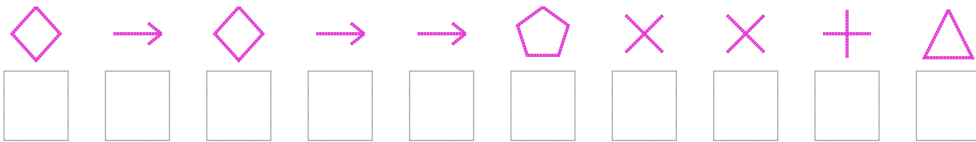
4. Şifre



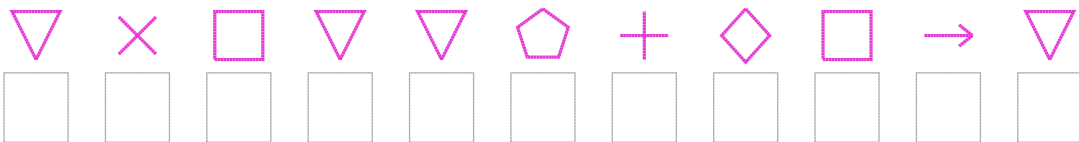
5. Şifre



6. Şifre



7. Şifre



□ BONUS: 4. ve 3. şifrenin üçüncü rakamının toplamı kaçtır?

Cevap Anahtarı

1. Şifre: 9344654720
2. Şifre: 208288168691
3. Şifre: 836504126
4. Şifre: 264121081490
5. Şifre: 4938335725
6. Şifre: 4141162207
7. Şifre: 82588604518

□ Bonus Soru Cevabı: 10